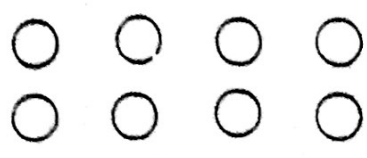







3. Cerchia, per ogni gruppo, gli elementi corrispondenti alle frazioni.

$\frac{1}{4}$ 	$\frac{1}{3}$ 
$\frac{1}{2}$ 	$\frac{1}{5}$ 
$\frac{1}{7}$ 	$\frac{1}{6}$ 

4. Calcola:
- $\frac{1}{5}$  di 20 .....  
.....
  - $\frac{1}{10}$  di 30 .....  
.....
  - $\frac{1}{8}$  di 24 .....  
.....
  - $\frac{1}{6}$  di 36 .....  
.....
  - $\frac{1}{9}$  di 45 .....  
.....
  - $\frac{1}{7}$  di 14 .....  
.....