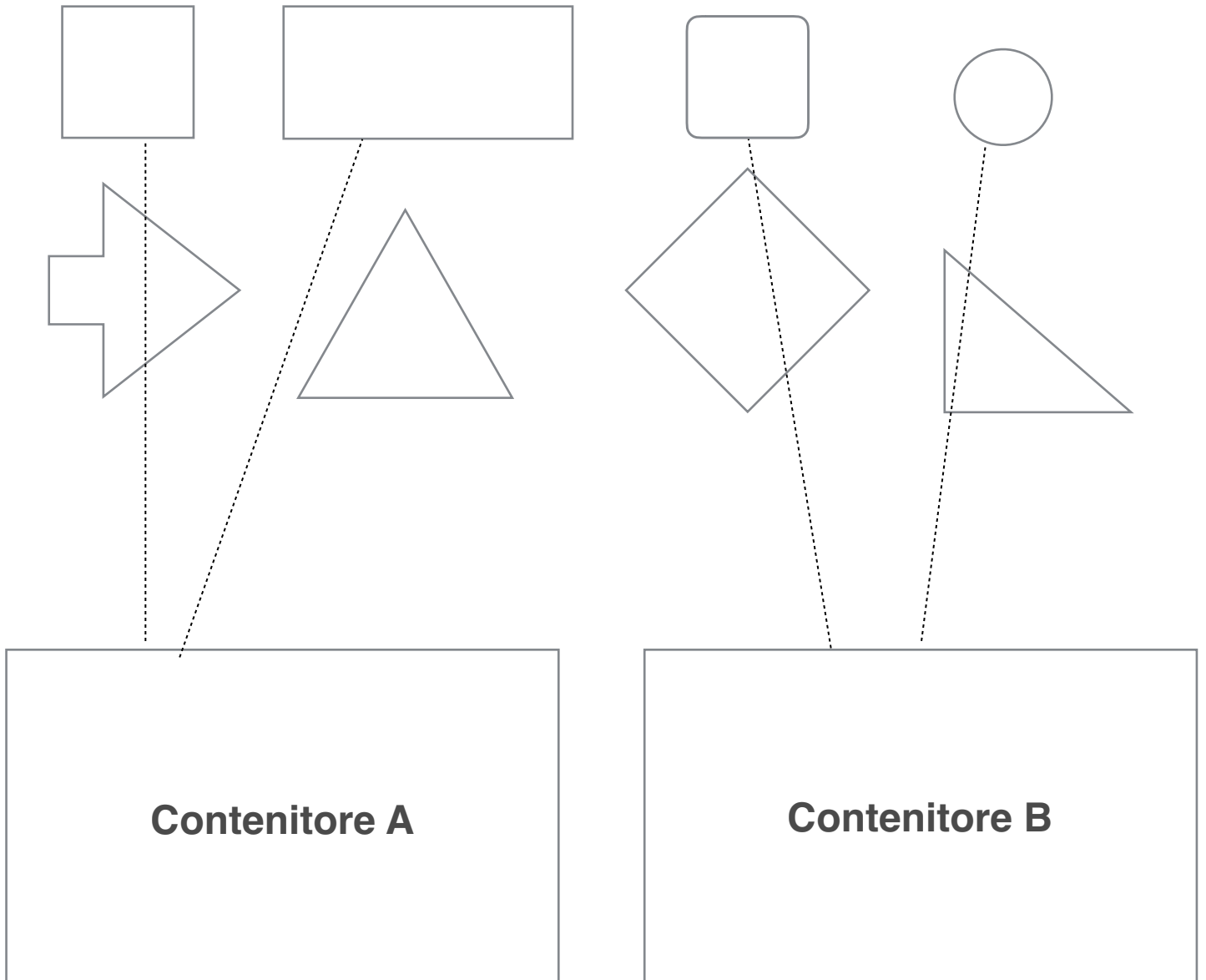


## LA DIVISIONE DI RIPARTIZIONE (DISTRIBUZIONE): AVVIO

Ho 8 forme geometriche e devo riporle in parti uguali, in 2 contenitori; inizio la distribuzione usando questo criterio: una forma nel contenitore A è una in quello B, una in quello A è una in quello B...



Continua tu.....

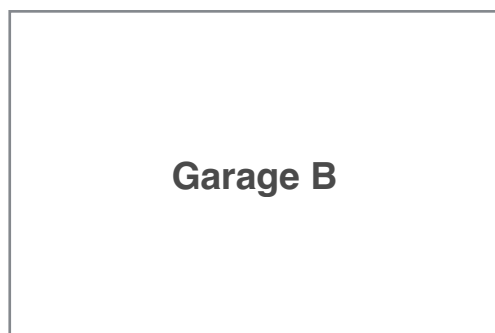
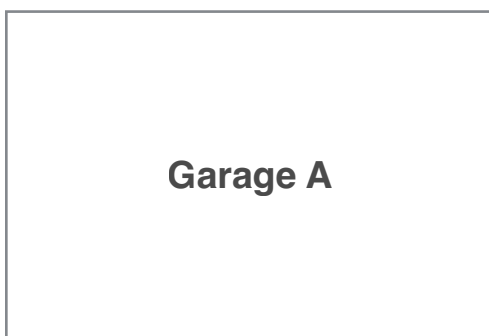
Quante forme avrai posto in ogni contenitore?

**8 : 2 = 4** numero forme in ogni contenitore

In ogni contenitore, ho posto 4 forme.

# SEGUO L' ESEMPIO E LAVORO DA SOLO:












1) Devo parcheggiare 8 automobili, in numero uguale, dentro a 2 garage.  
Quante automobili sistemerò in ogni garage?



Operazione:.....

Risposta:.....

2) La maestra distribuisce in parti uguali, 12 fotocopie a 6 alunni.  
Quante fotocopie, riceverà ogni alunno?



Operazione:.....

Risposta:.....

3) Ho 8 figurine, devo distribuirle in parti uguali a 4 bambini.  
Quante figurine avrà ogni bambino?



Disegna tu, i 4 bambini.

Operazione:.....

Risposta:.....