


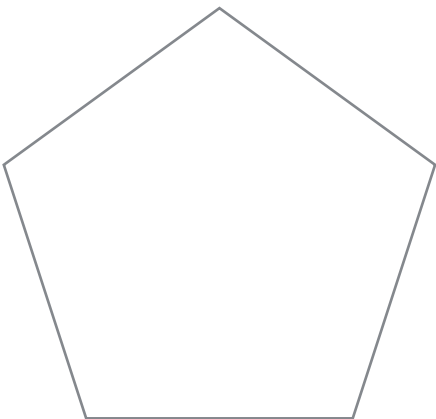
## Esercizi

1) Completo le frasi con la risposta esatta:


- 1) una linea mista chiusa
- 2) una linea mista spezzata
- 3) Una linea curva



La figura ha per confine.....


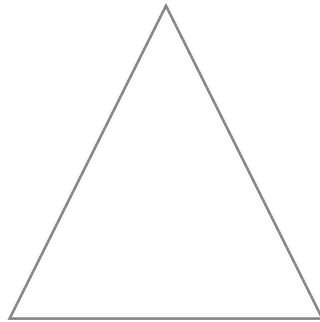


La figura ha per confine.....

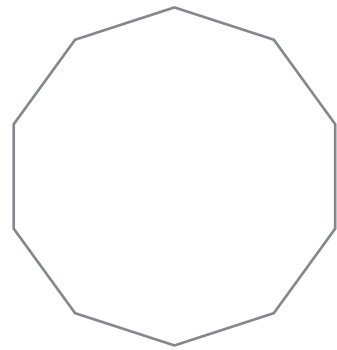
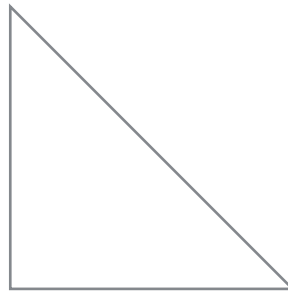
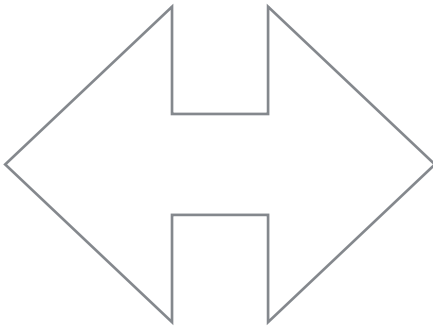


La figura ha per confine.....

**2) Colora il poligono con più lati.**



**3) Colora il poligono con meno lati.**



**4) Metti in ordine crescente in base al numero di lati ( numerando i poligoni).**

